

Name _____

TA's Name _____

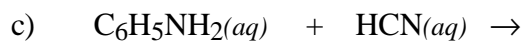
Lab Section _____

INSTRUCTIONS:

1. This examination consists of a total of 9 different pages. The last three pages include a periodic table, some useful mathematical equations, a solubility table and a table of equilibrium constants. All work should be done in this booklet.
2. PRINT your name, TA's name and your lab section number now in the space at the top of this sheet. DO NOT SEPARATE THESE PAGES.
3. Answer all questions that you can and whenever called for show your work clearly. Your method of solving problems should pattern the approach used in lecture. You do not have to show your work for the multiple choice or short answer questions.
4. No credit will be awarded if your work is not shown in problems 3, 5, 6b and 7.
5. Point values are shown next to the problem number.
6. Budget your time for each of the questions. Some problems may have a low point value yet be very challenging. If you do not recognize the solution to a question quickly, skip it, and return to the question after completing the easier problems.
7. Look through the exam before beginning; plan your work; then begin.
8. ~~Relax~~ and do well.

	Page 2	Page 3	Page 4	Page 5	Page 6	TOTAL
SCORES	<u> </u> (23)	<u> </u> (20)	<u> </u> (30)	<u> </u> (9)	<u> </u> (16)	<u> </u> (100)

(9) 1. Write the chemical formula(s) of the product(s) and balance the following reactions. Identify all products phases as either (g)as, (l)iquid, (s)olid or (aq)ueous. Soluble ionic compounds should be written in the form of their component ions.



(8) 2. Write the ionic and net ionic chemical equations for 1a).

1a)

Ionic equation:

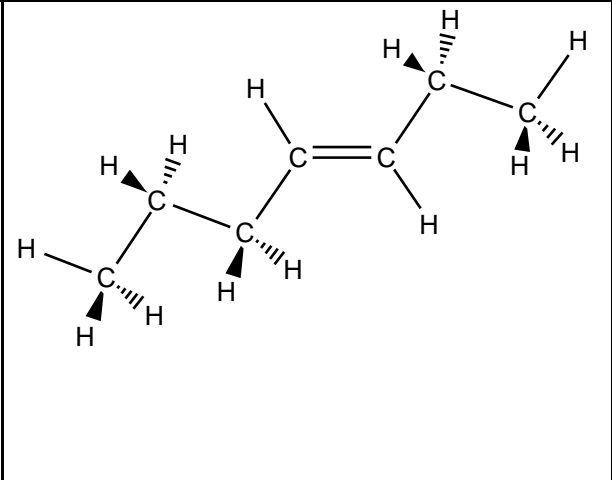
Net Ionic equation:

1b)

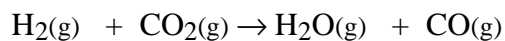
Ionic equation:

Net Ionic equation:

(6) 3. Give the name or draw the Lewis structure for each of the following compounds.

	4,5-dimethyl-2-hexyne	2,3-dimethyl-2-butene
--	-----------------------	-----------------------

- (20) 4. When $\text{H}_2(\text{g})$ is mixed with $\text{CO}_2(\text{g})$ at 2000 K, the equilibrium is achieved according to the equation below,



In one experiment, the following equilibrium concentrations were measured;

$$\begin{aligned}[\text{H}_2] &= 0.150 \text{ M} \\ [\text{CO}_2] &= 0.400 \text{ M} \\ [\text{H}_2\text{O}] &= [\text{CO}] = 0.550 \text{ M}\end{aligned}$$

- a) Calculate the value of K_c , the equilibrium constant for the reaction.
- b) In a different experiment, 0.75 mol $\text{H}_2(\text{g})$ is mixed with 0.75 mol of $\text{CO}_2(\text{g})$ in a 3.00 liter reaction vessel at 2000 K. Calculate the equilibrium concentrations, in moles per liter of all species at this temperature.

(30) 5. Calculate the pH for each of the following solution;

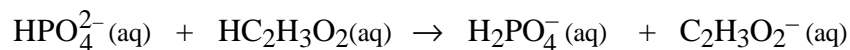
a) 0.00360 M $\text{Ba}(\text{OH})_2$

b) 0.750 M $\text{HC}_3\text{H}_5\text{O}_2$ (propionic acid)

c) 0.218 M $(\text{CH}_3)_3\text{N}$

Short Answer: Parts a – d are worth 4 points, part e is worth 6 points and part f is worth 9 points.

(20) 6a. Identify the acid, base, conjugate acid and conjugate base in the following chemical equation,



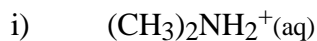
b) K for the reaction in 6a above has a value of 290. Identify the stronger acid and base in the reaction.

acid _____ base _____

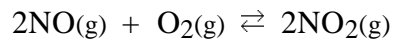
c) The pH of a 5.50×10^{-4} M HClO_3 solution is about 3.30. Is HClO_3 a strong acid or a weak acid? Explain.

d) Identify the chemical specie(s) in the highest concentration in 6c. (Note: excluding water.)

e) Identify each of the following substances as an acid or a base and write a chemical equation that describes the acid or base character.



- f) K_p is 2.00 at a certain temperature for the reaction below



The reaction mixture initially contains 1 atm of each compound in the equation, and then is allowed to proceed towards equilibrium.

- i) Will the total pressure of the reaction system increase, decrease or stay the same? Explain.
- ii) Will $P_{\text{NO}} = P_{\text{O}_2}$ when equilibrium is established? Explain.
- iii) The reaction between $\text{NO}(\text{g})$ and $\text{O}_2(\text{g})$ is exothermic. What will happen to the magnitude of K if the temperature of the reaction is increased? Explain

Periodic Table of the Elements

	IA																VIII A	
1	1 H 1.008																	2 He 4.00
2	3 Li 6.94	IIA	4 Be 9.01										IIIA	IVA	VA	VIA	VIIA	10 Ne 20.18
3	11 Na 22.99	12 Mg 24.30											5 B 10.81	6 C 12.01	7 N 14.01	8 O 16.00	9 F 19.00	18 Ar 39.95
4	19 K 39.10	20 Ca 40.08	21 Sc 44.96	22 Ti 47.88	23 V 50.94	24 Cr 52.00	25 Mn 54.94	26 Fe 55.85	27 Co 58.93	28 Ni 58.69	29 Cu 63.55	30 Zn 65.38	31 Ga 69.72	32 Ge 72.59	33 As 74.92	34 Se 78.96	35 Br 79.90	36 Kr 83.80
5	37 Rb 85.47	38 Sr 87.62	39 Y 88.91	40 Zr 91.22	41 Nb 92.91	42 Mo 95.94	43 Tc (98)	44 Ru 101.1	45 Rh 102.9	46 Pd 106.4	47 Ag 107.9	48 Cd 112.4	49 In 114.8	50 Sn 118.7	51 Sb 121.8	52 Te 127.6	53 I 126.9	54 Xe 131.3
6	55 Cs 132.9	56 Ba 137.3	57 La 138.9	72 Hf 178.5	73 Ta 180.9	74 W 183.8	75 Re 186.2	76 Os 190.2	77 Ir 192.2	78 Pt 195.1	79 Au 197.0	80 Hg 200.6	81 Tl 204.4	82 Pb 207.2	83 Bi 209.0	84 Po (209)	85 At (210)	86 Rn (222)
7	87 Fr (223)	88 Ra 226.0	89 Ac 227.0	104 Rf (261)	105 Db (262)	106 Sg (263)	107 Bh (262)	108 Hs (265)	109 Mt (266)									

Lanthanides	58 Ce 140.1	59 Pr 140.9	60 Nd 144.2	61 Pm (145)	62 Sm 150.4	63 Eu 152.0	64 Gd 157.2	65 Tb 158.9	66 Dy 162.5	67 Ho 164.9	68 Er 167.3	69 Tm 168.9	70 Yb 173.0	71 Lu 175.0
Actinides	90 Th 232.0	91 Pa 231.0	92 U 238.0	93 Np 237.0	94 Pu (244)	95 Am (243)	96 Cm (247)	97 Bk (247)	98 Cf (251)	99 Es (252)	100 Fm (257)	101 Md (258)	102 No (259)	103 Lr (260)

Useful Information

$$K_w = 1.0 \times 10^{-14}$$

$$K_p = K_c(RT)^{\Delta n}$$

$$\text{pH} = -\log[\text{H}^+]$$

$$\text{pH} + \text{pOH} = 14$$

$$x_{1,2} = \frac{-b \pm \sqrt{b^2 - 4ac}}{2a} \quad \text{for } ax^2 + bx + c = 0$$

$$6.023 \times 10^{23}$$

$$R = 0.0821 \frac{\text{L}\cdot\text{atm}}{\text{mol}\cdot\text{K}} = 8.314 \frac{\text{J}}{\text{mol}\cdot\text{K}}$$

E.1 DISSOCIATION CONSTANTS FOR ACIDS AT 25 °C

Name	Formula	K_{a1}	K_{a2}	K_{a3}
Acetic	$\text{HC}_2\text{H}_3\text{O}_2$	1.8×10^{-5}		
Ascorbic	$\text{HC}_6\text{H}_7\text{O}_6$	8.0×10^{-3}		
Arsenic	H_3AsO_4	5.6×10^{-3}	1.0×10^{-7}	3.0×10^{-12}
Arsenous	H_3AsO_3	6.0×10^{-10}		
Benzoic	$\text{HC}_7\text{H}_5\text{O}_2$	6.5×10^{-5}		
Boric	H_3BO_3	5.8×10^{-10}		
Butyric acid	$\text{HC}_4\text{H}_7\text{O}_2$	1.5×10^{-5}		
Carbonic	H_2CO_3	4.3×10^{-7}	5.6×10^{-11}	
Cyanic	HCNO	3.5×10^{-4}		
Citric	$\text{H}_3\text{C}_6\text{H}_5\text{O}_7$	7.4×10^{-4}	1.7×10^{-5}	4.0×10^{-7}
Formic	HCHO_2	1.8×10^{-4}		
Hydroazotic	HN_3	1.9×10^{-5}		
Hydrocyanic	HCN	4.9×10^{-10}		
Hydrofluoric	HF	7.2×10^{-4}		
Hydrogen chromate ion	HCrO_4^-	3.0×10^{-7}		
Hydrogen peroxide	H_2O_2	2.4×10^{-12}		
Hydrogen selenate ion	HSeO_4^-	2.2×10^{-2}		
Hydrogen sulfate ion	HSO_4^-	1.2×10^{-2}		
Hydrogen sulfide	H_2S	5.7×10^{-8}	1.3×10^{-13}	
Hypobromous	HBrO	2.0×10^{-9}		
Hypochlorous	HClO	3.0×10^{-8}		
Hypoiodous	HIO	2.0×10^{-11}		
Iodic	HIO_3	1.7×10^{-1}		
Lactic	$\text{HC}_3\text{H}_5\text{O}_3$	1.4×10^{-4}		
Malonic	$\text{H}_2\text{C}_3\text{H}_2\text{O}_4$	1.5×10^{-3}	2.0×10^{-6}	
Oxalic	$\text{H}_2\text{C}_2\text{O}_4$	5.9×10^{-2}	6.4×10^{-5}	
Nitrous	HNO_2	4.5×10^{-4}		
Phenol	$\text{HC}_6\text{H}_5\text{O}$	1.3×10^{-10}		
Phosphoric	H_3PO_4	7.5×10^{-3}	6.2×10^{-8}	4.2×10^{-13}
Paraperiodic	H_5IO_6	2.8×10^{-2}	5.3×10^{-9}	
Propionic	$\text{HC}_3\text{H}_5\text{O}_2$	1.3×10^{-5}		
Pyrophosphoric	$\text{H}_4\text{P}_2\text{O}_7$	3.0×10^{-2}	4.4×10^{-3}	
Selenous	H_2SeO_3	2.3×10^{-3}	5.3×10^{-9}	
Sulfuric	H_2SO_4	strong acid	1.2×10^{-2}	
Sulfurous	H_2SO_3	1.7×10^{-2}	6.4×10^{-8}	
Tartaric	$\text{H}_2\text{C}_4\text{H}_4\text{O}_6$	1.0×10^{-3}	4.6×10^{-5}	

E.2 DISSOCIATION CONSTANTS FOR BASES AT 25°C

Name	Formula	K_b	Name	Formula	K_b
Ammonia	NH_3	1.8×10^{-5}	Hydroxylamine	HONH_2	1.1×10^{-8}
Aniline	$\text{C}_6\text{H}_5\text{NH}_2$	4.3×10^{-10}	Methylamine	CH_3NH_2	4.4×10^{-4}
Dimethylamine	$(\text{CH}_3)_2\text{NH}$	5.4×10^{-4}			
Ethylamine	$\text{C}_2\text{H}_5\text{NH}_2$	6.4×10^{-4}	Trimethylamine	$(\text{CH}_3)_3\text{N}$	6.4×10^{-5}
Hydrazine	H_2NNH_2	1.3×10^{-6}			

Solubility Table

<u>Ion</u>	<u>Solubility</u>	<u>Exceptions</u>
NO ₃ ⁻	soluble	none
ClO ₄ ⁻	soluble	none
Cl ⁻	soluble	except Ag ⁺ , Hg ₂ ²⁺ , *Pb ²⁺
I ⁻	soluble	except Ag ⁺ , Hg ₂ ²⁺ , Pb ²⁺
SO ₄ ²⁻	soluble	except Ca ²⁺ , Ba ²⁺ , Sr ²⁺ , Hg ²⁺ , Pb ²⁺ , Ag ⁺
CO ₃ ²⁻	insoluble	except Group IA and NH ₄ ⁺
PO ₄ ³⁻	insoluble	except Group IA and NH ₄ ⁺
-OH	insoluble	except Group IA, *Ca ²⁺ , Ba ²⁺ , Sr ²⁺
S ²⁻	insoluble	except Group IA, IIA and NH ₄ ⁺
Na ⁺	soluble	none
NH ₄ ⁺	soluble	none
K ⁺	soluble	none

*slightly soluble