

CHEM 1215
Exam III
John III. Gelder
November 11, 1998

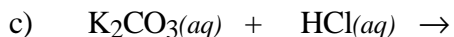
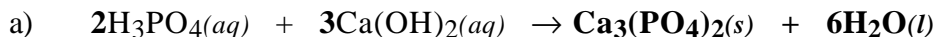
Name _____
TA's Name _____
Lab Section _____

INSTRUCTIONS:

1. This examination consists of a total of 7 different pages. The last page includes a periodic table and a solubility table. All work should be done in this booklet.
2. PRINT your name, TA's name and your lab section number now in the space at the top of this sheet. **DO NOT SEPARATE THESE PAGES.**
3. Answer all questions that you can and whenever called for show your work clearly. Your method of solving problems should pattern the approach used in lecture. You do not have to show your work for the multiple choice (if any) or short answer questions.
4. No credit will be awarded if your work is not shown in problems 3 - 5 and 8 - 10.
5. Point values are shown next to the problem number.
6. Budget your time for each of the questions. Some problems may have a low point value yet be very challenging. If you do not recognize the solution to a question quickly, skip it, and return to the question after completing the easier problems.
7. Look through the exam before beginning; plan your work; then begin.
8. ~~Relax~~ and do well.

	Page 2	Page 3	Page 4	Page 5	Page 6	TOTAL
SCORES	<u> </u> (30)	<u> </u> (16)	<u> </u> (30)	<u> </u> (12)	<u> </u> (12)	<u> </u> (100)

(12) 1. Write the chemical formula(s) of the product(s) and balance the following reactions. Identify all products phases as either (g)as, (l)iquid, (s)olid or (aq)ueous.



(8) 2. Write the balanced ionic and balanced net ionic chemical equations for any two of the reactions in Problem 1. (Remember to include the correct charges on all ions and the phase of each species.)

1a, 1b or 1c)

Ionic equation:

Net Ionic equation:

1a, 1b or 1c)

Ionic equation:

Net Ionic equation:

(10) 3. Dopamine, $\text{C}_8\text{H}_{11}\text{O}_2\text{N}$, is a neurotransmitter. Determine the percent (by mass) composition of each of the elements in dopamine.

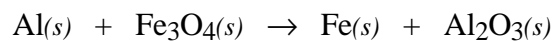
(10) 4. Find the empirical formula of a compound that is 48.38% carbon, 8.12% hydrogen, and 53.5% oxygen by mass.

(6) 5. The formula of the sulfate of an unknown metal, X, is $X_2(SO_4)_3$. The compound also is 41.7% X, 19.4% S and 38.9% O. Determine the atomic mass and the symbol of the element X.

(20) 6. Complete the following table

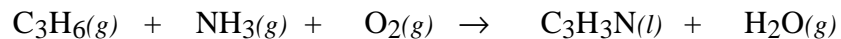
Formula	M , Molar Mass $\left(\frac{\text{g}}{\text{mol}}\right)$	m , Mass of sample (g)	n , Moles of sample (mol)	N , Number of atoms, molecules, or formula units
KClO ₃				1.45×10^{22} formula units
SO ₂		399		
unknown		4.91	6.28×10^{-2}	
Mg ₃ Al ₂ (SiO ₄) ₃	403		2.48×10^{-2}	

(10) 7. The thermite reaction



Calculate how many grams of iron can be produced when 14.0 g of Al are combined with excess Fe₃O₄.

- (12) 8. Acrylonitrile, C_3H_3N , is an important component for synthetic fibers and plastics. The compound is synthesized from propene (C_3H_6), ammonia and oxygen according to the equation,



89.5 g of propene are added to an amount of ammonia and oxygen. After the reaction occurs 1.65 moles of C_3H_3N are produced. Answer each of the following,

- a) the mass of C_3H_3N produced?
- b) the mass of NH_3 reacting?
- c) Is propene the limiting reagent in this reaction? Explain. (You may use a calculation to support your answer.)

(12) 9. The reaction which occurs when an Alka-Seltzer™ tablet is added to water,



One Alka-Seltzer tablet contains 1.92 g of sodium bicarbonate and 1.00 g of citric acid. What mass of carbon dioxide gas will fizz out when one tablet is plopped into water?

Periodic Table of the Elements

	IA																	VIIIA	
1	1 H 1.008																		2 He 4.00
2	3 Li 6.94	IIA 4 Be 9.01										III A 5 B 10.81	IVA 6 C 12.01	VA 7 N 14.01	VIA 8 O 16.00	VIIA 9 F 19.00	10 Ne 20.18		
3	11 Na 22.99	12 Mg 24.30										13 Al 26.98	14 Si 28.09	15 P 30.97	16 S 32.06	17 Cl 35.45	18 Ar 39.95		
4	19 K 39.10	20 Ca 40.08	21 Sc 44.96	22 Ti 47.88	23 V 50.94	24 Cr 52.00	25 Mn 54.94	26 Fe 55.85	27 Co 58.93	28 Ni 58.69	29 Cu 63.55	30 Zn 65.38	31 Ga 69.72	32 Ge 72.59	33 As 74.92	34 Se 78.96	35 Br 79.90	36 Kr 83.80	
5	37 Rb 85.47	38 Sr 87.62	39 Y 88.91	40 Zr 91.22	41 Nb 92.91	42 Mo 95.94	43 Tc (98)	44 Ru 101.1	45 Rh 102.9	46 Pd 106.4	47 Ag 107.9	48 Cd 112.4	49 In 114.8	50 Sn 118.7	51 Sb 121.8	52 Te 127.6	53 I 126.9	54 Xe 131.3	
6	55 Cs 132.9	56 Ba 137.3	57 La 138.9	72 Hf 178.5	73 Ta 180.9	74 W 183.8	75 Re 186.2	76 Os 190.2	77 Ir 192.2	78 Pt 195.1	79 Au 197.0	80 Hg 200.6	81 Tl 204.4	82 Pb 207.2	83 Bi 209.0	84 Po (209)	85 At (210)	86 Rn (222)	
7	87 Fr (223)	88 Ra 226.0	89 Ac 227.0	104 Rf (261)	105 Db (262)	106 Sg (263)	107 Bh (262)	108 Hs (265)	109 Mt (266)										

Lanthanides	58 Ce 140.1	59 Pr 140.9	60 Nd 144.2	61 Pm (145)	62 Sm 150.4	63 Eu 152.0	64 Gd 157.2	65 Tb 158.9	66 Dy 162.5	67 Ho 164.9	68 Er 167.3	69 Tm 168.9	70 Yb 173.0	71 Lu 175.0
Actinides	90 Th 232.0	91 Pa 231.0	92 U 238.0	93 Np 237.0	94 Pu (244)	95 Am (243)	96 Cm (247)	97 Bk (247)	98 Cf (251)	99 Es (252)	100 Fm (257)	101 Md (258)	102 No (259)	103 Lr (260)

Solubility Table

<u>Ion</u>	<u>Solubility</u>	<u>Exceptions</u>
NO_3^-	soluble	none
ClO_4^-	soluble	none
Cl^-	soluble	except Ag^+ , Hg_2^{2+} , Pb^{2+}
SO_4^{2-}	soluble	except Ca^{2+} , Ba^{2+} , Sr^{2+} , Hg^{2+} , Pb^{2+} , Ag^+
CO_3^{2-}	insoluble	except Group IA and NH_4^+
PO_4^{3-}	insoluble	except Group IA and NH_4^+
CrO_4^{2-}	insoluble	except Group IA, IIA and NH_4^+
OH^-	insoluble	except Group IA, Ca^{2+} , Ba^{2+} , Sr^{2+}
S^{2-}	insoluble	except Group IA, IIA and NH_4^+
Na^+	soluble	none
NH_4^+	soluble	none
K^+	soluble	none

*slightly soluble

