

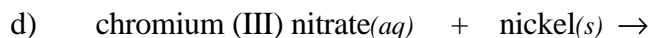
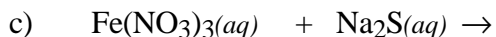
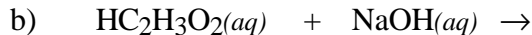
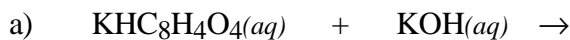
Name _____
TA's Name _____
Lab Section _____

INSTRUCTIONS:

1. This examination consists of a total of 9 different pages. The last three pages include a periodic table, a solubility table, a table of bond energies and some useful equations. All work should be done in this booklet.
2. PRINT your name, TA's name and your lab section number now in the space at the top of this sheet. DO NOT SEPARATE THESE PAGES.
3. Answer all questions that you can and whenever called for show your work clearly. Your method of solving problems should pattern the approach used in lecture. You do not have to show your work for the multiple choice or short answer questions.
4. No credit will be awarded if your work is not shown in problems 4a and 4b.
5. Point values are shown next to the problem number.
6. Budget your time for each of the questions. Some problems may have a low point value yet be very challenging. If you do not recognize the solution to a question quickly, skip it, and return to the question after completing the easier problems.
7. Look through the exam before beginning; plan your work; then begin.
8. ~~Relax~~ and do well.

	Page 2	Page 3	Page 4	Page 5	Page 6	TOTAL
SCORES	<u>(30)</u>	<u>(24)</u>	<u>(22)</u>	<u>(15)</u>	<u>(9)</u>	<u>(100)</u>

(12) 1. Write the chemical formula(s) of the product(s) and balance the following reactions. Identify all products phases as either (g)as, (l)iquid, (s)olid or (aq)ueous. Soluble ionic compounds should be written in the form of their component ions.



(8) 2. Write the ionic and net ionic chemical equations for 1b) and 1c).

1b)

Ionic equation:

Net Ionic equation:

1c)

Ionic equation:

Net Ionic equation:

(10) 3. Explain why the first ionization energy for potassium is small ($419 \text{ kJ}\cdot\text{mol}^{-1}$) and why the ionization for the second electron in potassium is much larger ($3,051 \text{ kJ}\cdot\text{mol}^{-1}$). Explain your answer in terms of *effective nuclear charge* and *shielding effects*.

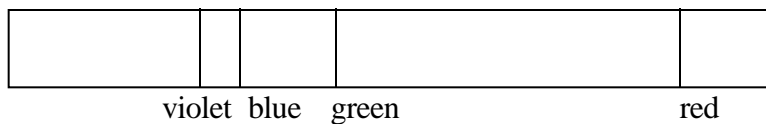
(24) 4. A hydrogen atom is known to absorb a photon of light with a frequency of $2.47 \times 10^{15} \text{ s}^{-1}$.

a) Calculate the wavelength of this photon.


b) Calculate the energy of the photon.

c) Draw a picture that represents what happens to the electron when a photon is absorbed. (Label the parts of your picture.)

d) The emission spectrum for the hydrogen atom in the visible region of the electromagnetic spectrum is shown below. How does our model of the hydrogen atom explain why the spectrum is discrete (consists of lines).



(12) 5. Draw a possible Lewis electron-dot structure for each of the covalent molecules below. Include all resonance structures if they are needed to adequately represent the bonding in the molecule.



(10) 6. In the quantum mechanical description of the hydrogen atom what characteristics of an orbital are determined by;

a) the principal quantum number, n ?

b) the azimuthal quantum number, l ?

c) the magnetic quantum number, m_l ?

(4) 7. Give the value for each of the quantum numbers for a valence electron in Se.

(6) 8. Write the electron configuration for,

i. Zn

ii. Bi

iii. Ge^{2+}

(5) 8a. Arrange the following covalent diatomic molecules in order of the length of the bond

BrCl, ClF, IBr

shortest

longest

b) Which will have the weakest bond energy?

Multiple Choice: (9 points)

Print the letter (A, B, C, D) which corresponds to the answer selected.

10. _____ 11. _____ 12. _____

ONLY THE ANSWERS IN THE AREA ABOVE WILL BE GRADED. Select the most correct answer for each question. Each question is worth 3 points.

10. In which of the following species would you expect the NO bond energy to be the lowest?
A) NO_3^- B) NO_2^+ C) ONCl D) NO_2^-
11. Which of the following species is the octet rule violated?
A) O_3
B) N_3^-
C) I_3^-
D) O_2^{2-}
12. An atom of element Z has a valence electron configuration of ns^2np^3 . The formula of the compound containing magnesium and Z is;
A) MgZ
B) Mg_2Z
C) MgZ_2
D) Mg_2Z_3
E) Mg_3Z_2

Periodic Table of the Elements

	IA															VIIIA		
1	1 H 1.008															2 He 4.00		
2	3 Li 6.94	4 Be 9.01											5 B 10.81	6 C 12.01	7 N 14.01	8 O 16.00	9 F 19.00	10 Ne 20.18
3	11 Na 22.99	12 Mg 24.30	IIIB	IVB	VB	VIB	VIIB	VIII			IB	IIB	13 Al 26.98	14 Si 28.09	15 P 30.97	16 S 32.06	17 Cl 35.45	18 Ar 39.95
4	19 K 39.10	20 Ca 40.08	21 Sc 44.96	22 Ti 47.88	23 V 50.94	24 Cr 52.00	25 Mn 54.94	26 Fe 55.85	27 Co 58.93	28 Ni 58.69	29 Cu 63.55	30 Zn 65.38	31 Ga 69.72	32 Ge 72.59	33 As 74.92	34 Se 78.96	35 Br 79.90	36 Kr 83.80
5	37 Rb 85.47	38 Sr 87.62	39 Y 88.91	40 Zr 91.22	41 Nb 92.91	42 Mo 95.94	43 Tc (98)	44 Ru 101.1	45 Rh 102.9	46 Pd 106.4	47 Ag 107.9	48 Cd 112.4	49 In 114.8	50 Sn 118.7	51 Sb 121.8	52 Te 127.6	53 I 126.9	54 Xe 131.3
6	55 Cs 132.9	56 Ba 137.3	57 La 138.9	72 Hf 178.5	73 Ta 180.9	74 W 183.8	75 Re 186.2	76 Os 190.2	77 Ir 192.2	78 Pt 195.1	79 Au 197.0	80 Hg 200.6	81 Tl 204.4	82 Pb 207.2	83 Bi 209.0	84 Po (209)	85 At (210)	86 Rn (222)
7	87 Fr (223)	88 Ra 226.0	89 Ac 227.0	104 (261)	105 (262)	106 (263)												

Lanthanides	58 Ce 140.1	59 Pr 140.9	60 Nd 144.2	61 Pm (145)	62 Sm 150.4	63 Eu 152.0	64 Gd 157.2	65 Tb 158.9	66 Dy 162.5	67 Ho 164.9	68 Er 167.3	69 Tm 168.9	70 Yb 173.0	71 Lu 175.0
Actinides	90 Th 232.0	91 Pa 231.0	92 U 238.0	93 Np 237.0	94 Pu (244)	95 Am (243)	96 Cm (247)	97 Bk (247)	98 Cf (251)	99 Es (252)	100 Fm (257)	101 Md (258)	102 No (259)	103 Lr (260)

Useful Information

$$E_n = -2.18 \times 10^{-18} \text{ J} \left(\frac{1}{n^2} \right)$$

$$r_n = 0.529 \times 10^{-8} n^2 \text{ cm} \quad \Delta E = -2.18 \times 10^{-18} \text{ J} \left(\frac{1}{n_f^2} - \frac{1}{n_i^2} \right)$$

$$\lambda = \frac{c}{\nu}$$

$$E = h\nu$$

$$c = 3.00 \times 10^8 \frac{\text{m}}{\text{s}}$$

$$h = 6.626 \times 10^{-34} \text{ J}\cdot\text{s}$$

$$\Delta H^\circ_{\text{rxn}} = \sum n \text{ B.E.}_{\text{reactants}} - \sum m \text{ B.E.}_{\text{products}}$$

Solubility Table

<u>Ion</u>	<u>Solubility</u>	<u>Exceptions</u>
NO ₃ ⁻	soluble	none
ClO ₄ ⁻	soluble	none
Cl ⁻	soluble	except Ag ⁺ , Hg ₂ ²⁺ , *Pb ²⁺
I ⁻	soluble	except Ag ⁺ , Hg ₂ ²⁺ , Pb ²⁺
SO ₄ ²⁻	soluble	except Ca ²⁺ , Ba ²⁺ , Sr ²⁺ , Hg ²⁺ , Pb ²⁺ , Ag ⁺
CO ₃ ²⁻	insoluble	except Group IA and NH ₄ ⁺
PO ₄ ³⁻	insoluble	except Group IA and NH ₄ ⁺
⁻ OH	insoluble	except Group IA, *Ca ²⁺ , Ba ²⁺ , Sr ²⁺
S ²⁻	insoluble	except Group IA, IIA and NH ₄ ⁺
Na ⁺	soluble	none
NH ₄ ⁺	soluble	none
K ⁺	soluble	none

*slightly soluble

Bond Energy (kJ/mol)	
H-H	435
H-Cl	431
H-C	414
H-O	463
C-C	331
C=C	590
C≡C	812
C-O	326
C=O	803
C≡O	1075
N≡N	941
O ₂	495
Cl-Cl	243
S=O	523

Metal	Half-Reaction Reaction
Lithium	$\text{Li} \rightarrow \text{Li}^+ + \text{e}^-$
Potassium	$\text{K} \rightarrow \text{K}^+ + \text{e}^-$
Barium	$\text{Ba} \rightarrow \text{Ba}^{2+} + 2\text{e}^-$
Calcium	$\text{Ca} \rightarrow \text{Ca}^{2+} + 2\text{e}^-$
Sodium	$\text{Na} \rightarrow \text{Na}^+ + \text{e}^-$
Magnesium	$\text{Mg} \rightarrow \text{Mg}^{2+} + 2\text{e}^-$
Aluminum	$\text{Al} \rightarrow \text{Al}^{3+} + 3\text{e}^-$
Manganese	$\text{Mn} \rightarrow \text{Mn}^{2+} + 2\text{e}^-$
Zinc	$\text{Zn} \rightarrow \text{Zn}^{2+} + 2\text{e}^-$
Chromium	$\text{Cr} \rightarrow \text{Cr}^{3+} + 3\text{e}^-$
Iron	$\text{Fe} \rightarrow \text{Fe}^{2+} + 2\text{e}^-$
Cobalt	$\text{Co} \rightarrow \text{Co}^{2+} + 2\text{e}^-$
Nickel	$\text{Ni} \rightarrow \text{Ni}^{2+} + 2\text{e}^-$
Tin	$\text{Sn} \rightarrow \text{Sn}^{2+} + 2\text{e}^-$
Lead	$\text{Pb} \rightarrow \text{Pb}^{2+} + 2\text{e}^-$
Hydrogen	$\text{H}_2 \rightarrow 2\text{H}^+ + 2\text{e}^-$
Copper	$\text{Cu} \rightarrow \text{Cu}^{2+} + 2\text{e}^-$
Silver	$\text{Ag} \rightarrow \text{Ag}^+ + \text{e}^-$
Mercury	$\text{Hg} \rightarrow \text{Hg}^{2+} + 2\text{e}^-$
Platinum	$\text{Pt} \rightarrow \text{Pt}^{2+} + 2\text{e}^-$
Gold	$\text{Au} \rightarrow \text{Au}^{3+} + 3\text{e}^-$